


## MOSAICO ESTADÍSTICO



### Actividad:


























Aparecen aquí 25 preguntas sobre medias, modas y medianas. Cada pregunta lleva al lado un azulejo con un diseño. Por ejemplo, esta es la primera pregunta:



Al calcular la media de estos cuatro números se obtiene **42**. En la figura a continuación, debes, con los colores que quieras dibujar en el mosaico que lleva el valor **42**, las partes que aparecen sombreadas.

21	13	37	14	18
42	31	39	27	34
16	22	33	25	12
11	15	38	28	47
23	17	29	19	24

Estas son las preguntas que te permitirán rellenar el mosaico:

- |   |                                 |  |                                   |
|---|---------------------------------|--|-----------------------------------|
|    | <b>Media (35,41,43,49)</b>      |    | <b>Mediana(35,20,22,15)</b>       |
|    | <b>Moda(11,19,13,23,19)</b>     |    | <b>Media(15,21,11,17)</b>         |
|    | <b>Mediana(13,38,31,27,17)</b>  |    | <b>Moda(20,21,29,27,23,29)</b>    |
|    | <b>Media(13,28,31)</b>          |    | <b>Mediana(51,48,30,46,7,27)</b>  |
|   | <b>Mediana(4,15,11)</b>         |   | <b>Media(29,35,17,11)</b>         |
|  | <b>Moda(7,23,17,13,30,13)</b>   |  | <b>Moda(30,37,35,37,33,37,31)</b> |
|  | <b>Mediana(7,20,10,14,9,26)</b> |  | <b>Mediana(31,25,13)</b>          |
|  | <b>Media(10,23,12,15)</b>       |  | <b>Media(30,38)</b>               |
|  | <b>Moda(51,23,47,85,47)</b>     |  | <b>Mediana(9,30,17,19,25,27)</b>  |
|  | <b>Media(6,28,10,8,18)</b>      |  | <b>Moda(28,27,26,28,28)</b>       |
|  | <b>Mediana(23,19,15,7)</b>      |  | <b>Media(40,31,22)</b>            |
|  | <b>Media(30,48,39)</b>          |  | <b>Media(1,65,33)</b>             |
|  | <b>Moda(18,7,5,18,9,3)</b>      |  |                                   |